

Worksheets to print out from [sofatutor.com](https://www.sofatutor.com)

Tens and Ones



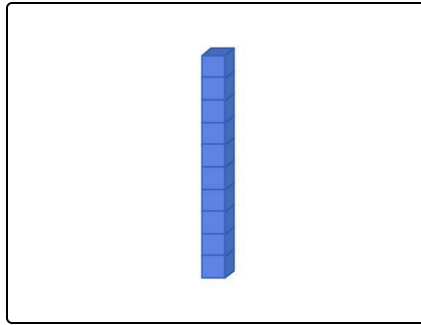
- 1 How many ones are in one group of ten?
- 2 How many tens and ones are in each number?
- 3 Complete the number pattern.
- 4 Which two statements are true about the number 25?
- 5 How many apple pies can Skylar make?
- 6 Complete the equations using tens and ones.
- + with many hints, answer keys, and solution approaches for all tasks



The complete package, including all tasks, hints, solutions, and solution approaches, is available to all subscribers of [sofatutor.com](https://www.sofatutor.com)

How many ones are in one group of ten?

Select the correct choice.



A

B

C

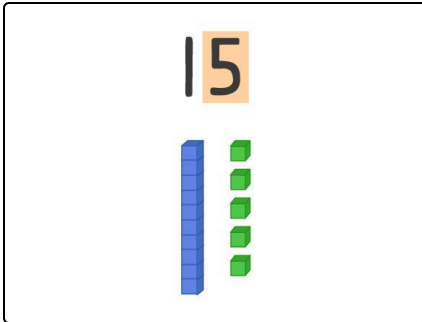
D

Our hints for the tasks

1
from 6

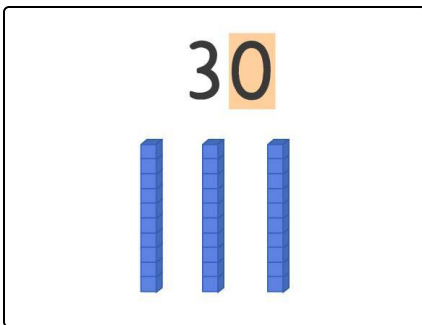
How many ones are in one group of ten?

1. Hint



15 has *one group of tens* and *five ones*.

2. Hint



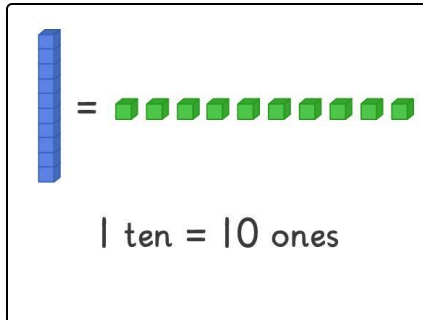
30 has *three groups of ten* and *zero ones*.

Solutions and solution approaches for the tasks

1
from 6

How many ones are in one group of ten?

Answer key: A



One group of ten has **ten ones**.