

Worksheets to print out from [sofatutor.com](https://www.sofatutor.com)

The Number 6




- 1 How many objects are in each picture?
- 2 Which picture shows the number six?
- 3 Which picture shows 6 counters?
- 4 Which sets have six objects?
- 5 How many objects are in each set?
- 6 Does the picture show 6 objects?
- + with many hints, answer keys, and solution approaches for all tasks




The complete package, including all tasks, hints, solutions, and solution approaches, is available to all subscribers of [sofatutor.com](https://www.sofatutor.com)

How many objects are in each picture?


Fill in the blanks with the correct option.




..... 1



..... 2



..... 3




..... 4

Our hints for the tasks

1
from 6

How many objects are in each picture?

1. Hint



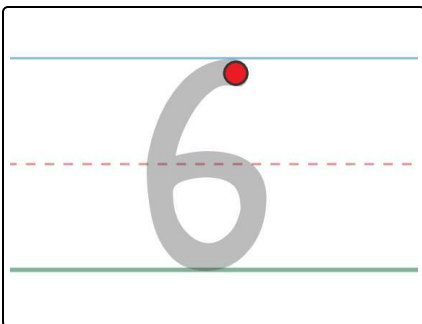
Use your fingers to count the number of objects.

2. Hint



Count **six** objects in each set.

3. Hint



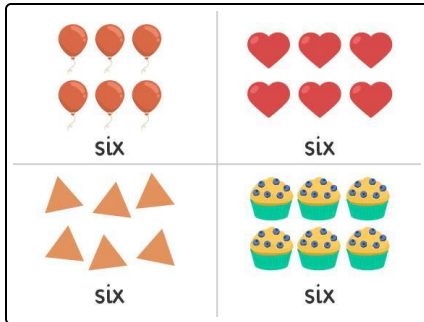
Use your finger to **trace the number six** on the screen.

Solutions and solution approaches for the tasks

1
from 6

How many objects are in each picture?

Answer key: 1: 6 // 2: 6 // 3: 6 // 4: 6



Each set has **six** objects.