

Worksheets to print out from [sofatutor.com](https://www.sofatutor.com)

## The Number 2



- 1 Spot the items that show 2.
- 2 How many bananas are in the image?
- 3 The different ways to show 2.
- 4 How do you write the number two?
- 5 2 or not 2?
- 6 Counting stars.
- + with many hints, answer keys, and solution approaches for all tasks



The complete package, including all tasks, hints, solutions, and solution approaches, is available to all subscribers of [sofatutor.com](https://www.sofatutor.com)

## Spot the items that show 2.

Highlight the examples of the number 2.

Can you find all 4 examples of the number two?

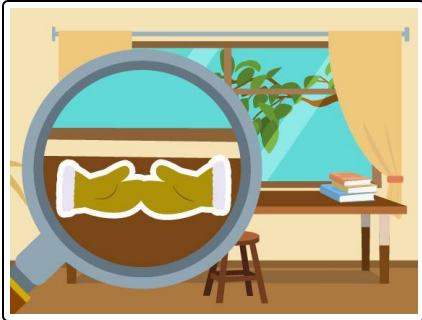


## Our hints for the tasks

1  
from 6

### Spot the items that show 2.

#### 1. Hint




Do you see the mittens on the table?

There are **2** of them!

Can you find the other items that show two?

---

#### 2. Hint



Here are **two** apples!


---

## Solutions and solution approaches for the tasks

1  
from 6

Spot the items that show 2.

2



1. There are **two beds**.
2. There are **two mittens** on the table.
3. There are **two apples** on the shelves.
4. There are **two flip-flops** on the floor.