


Worksheets to print out from [sofatutor.com](https://www.sofatutor.com)

Tools for Measuring Length




- 1 Which is the best tool to measure the objects?
- 2 What are the tools of measurement?
- 3 How to decide what measuring tool to use?
- 4 What objects can the ruler measure?
- 5 Are the statements true or false?
- 6 Place the correct words in the blank.
- + with many hints, answer keys, and solution approaches for all tasks



The complete package, **including all tasks, hints, solutions, and solution approaches**, is available to all subscribers of [sofatutor.com](https://www.sofatutor.com)

Which is the best tool to measure the objects?

Pair the object with the best measuring tool.



Zuri and Freddie are moving! They need to make sure everything will fit in their new home. Help them find the best measuring tools!

measuring tape

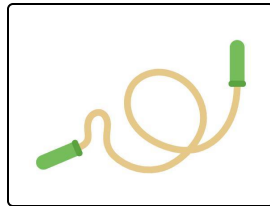
ruler

meter stick

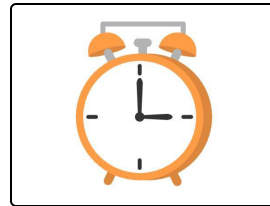
yardstick




.....1



.....2



.....3



.....4

Our hints for the tasks

1
from 6

Which is the best tool to measure the objects?

1. Hint

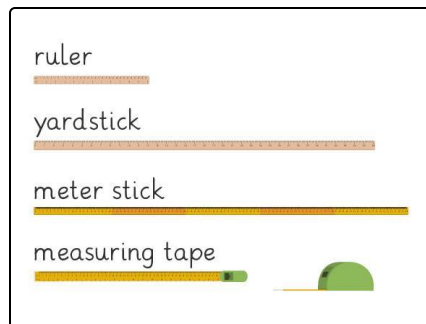
Remember the steps for measuring an object:

- Observe
- Identify
- Measure

2. Hint

The size of an object helps us know what measuring tool to use. The longer the object, the longer the measuring tool should be.

3. Hint



Use this image of the different tools to help.

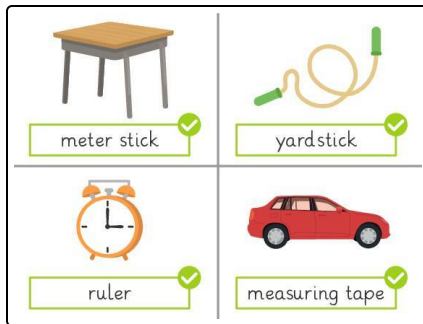
Solutions and solution approaches for the tasks

1
from 6

Which is the best tool to measure the objects?

Answer key: 1*: yardstick // 2*: meter stick // 3: ruler // 4: measuring tape

***also correct:** 1: meter stick // 2: yardstick



- The desk could be measured with a **meter stick** or a **yardstick**.
- The jump rope could be measured with a **meter stick** or a **yardstick**.
- The clock would be measured with a **ruler**.
- The car would be measured with a **measuring tape**.