

Worksheets to print out from [sofatutor.com](https://www.sofatutor.com)

Find the Missing Number on a Number Line



- 1 What are the steps of finding a missing number on a number line?
- 2 Number line patterns.
- 3 Skylar and Henry go on a hike.
- 4 Help Skylar and Henry find the trail.
- 5 Count the flowers.
- 6 Missing numbers.
- + with many hints, answer keys, and solution approaches for all tasks



The complete package, including all tasks, hints, solutions, and solution approaches, is available to all subscribers of [sofatutor.com](https://www.sofatutor.com)

What are the steps of finding a missing number on a number line?

Sort the steps of finding a missing number on a number line.



Count using this pattern to find the missing number.

A

First, look at the whole number line.

B

Reread the number line again to make sure it is correct.

C

Look for the pattern or what the number line is counting by.

D


CORRECT ORDER

Our hints for the tasks

1
from 6

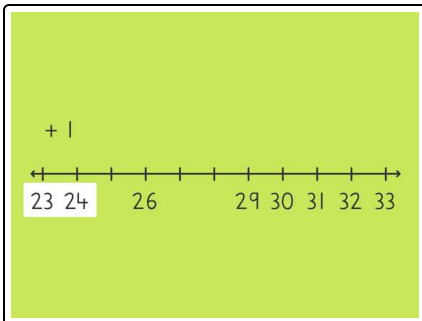
What are the steps of finding a missing number on a number line?

1. Hint



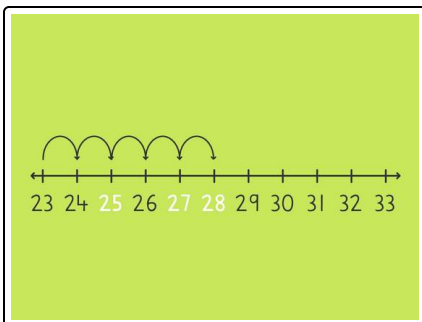
The image provides an example of the first step of finding a missing number on a number line.

2. Hint



The image provides an example of the second step of finding a missing number on a number line.

3. Hint



The image provides an example of the third step of finding a missing number on a number line.

Solutions and solution approaches for the tasks



What are the steps of finding a missing number on a number line?

Answer key: B, D, A, C

4 steps when a number is missing on a number line:

1. Look at the whole number line.
2. Look for the pattern or what the number line is counting by.
3. Count using this pattern to find the missing number.
4. Reread the number line again to make sure it is correct.