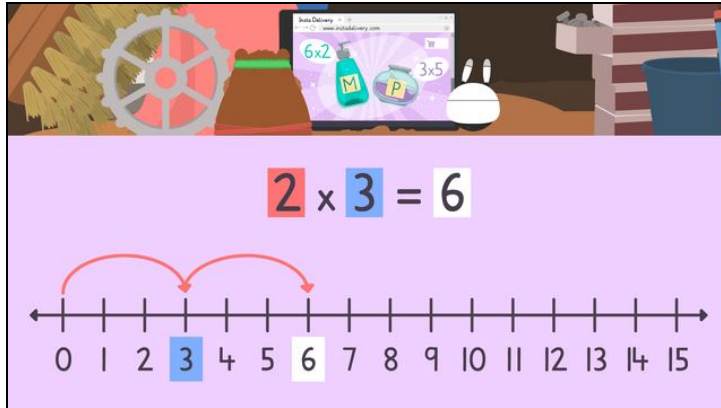




Worksheets to print out from [sofatutor.com](https://www.sofatutor.com)

Multiplication on a Number Line



- 1 Imani's metal shine spray.
- 2 How many berries does Mr. Squeaks order?
- 3 How many items does Mr. Squeaks order?
- 4 Use a number line to multiply.
- 5 How many glow sticks did he order?
- 6 Multiply on a number line.
- + with many hints, answer keys, and solution approaches for all tasks




The complete package, including all tasks, hints, solutions, and solution approaches, is available to all subscribers of [sofatutor.com](https://www.sofatutor.com)





Imani's metal shine spray.

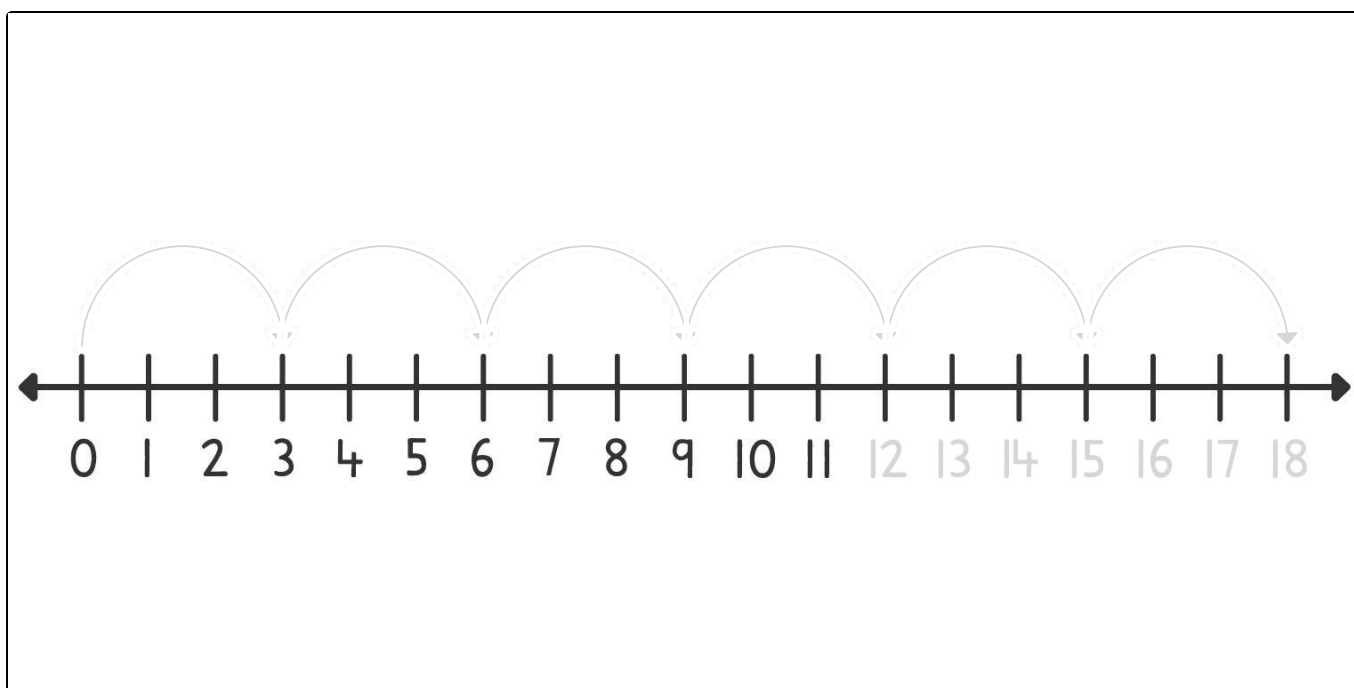
Highlight the jumps and total Use different colors.



Imani orders some metal shine spray to keep their exterior sparkling. They order **5** boxes. Each box contains **3** cans of spray. How many cans have they ordered in all?

Solve by using the number line. Highlight the **jumps in yellow** and the **total in green**.

 jumps  total





Our hints for the tasks

1
from 6

Imani's metal shine spray.

1. Hint

There are 3 cans in each box, so this is how many we jump each time.

2. Hint

Imani orders 5 boxes, this is the first factor, so this is the number of jumps that we should make.

3. Hint

What are 5 jumps of 3?



Solutions and solution approaches for the tasks

1
from 6

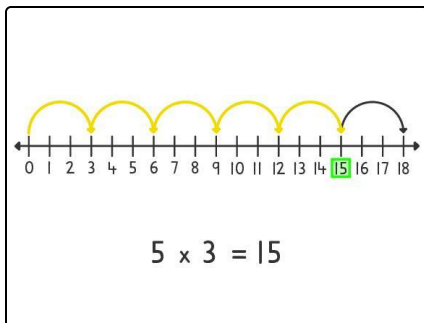
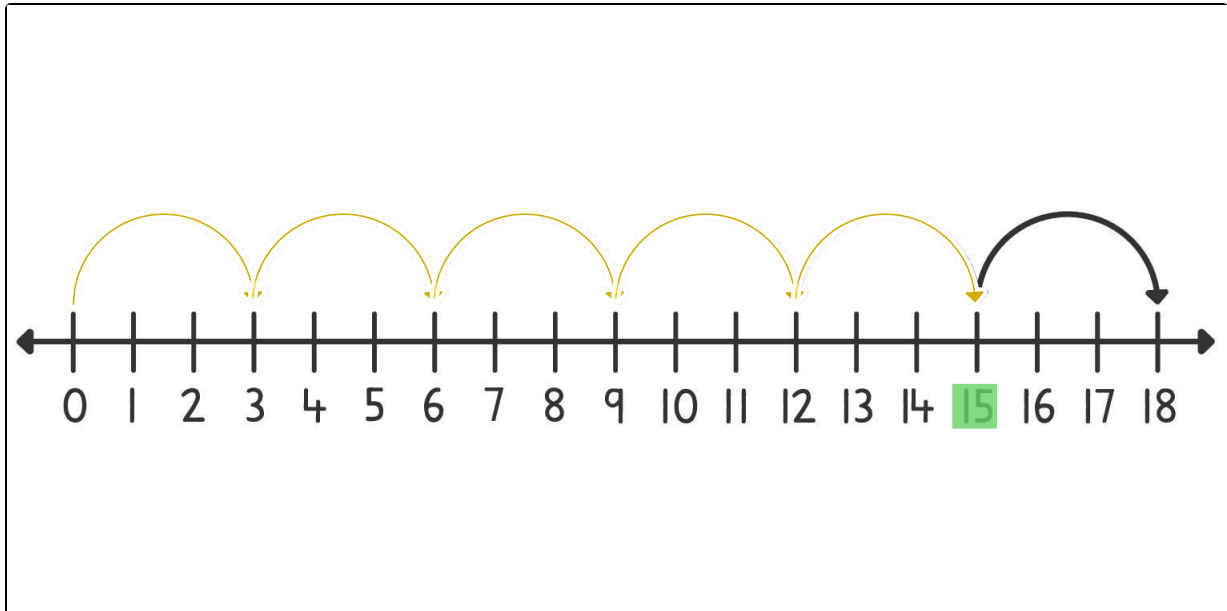
Imani's metal shine spray.



jumps



total



The image shows that Imani's equation is 5×3 so we make **5 jumps of 3** which gets us to **15** as the total.

We could also get to 15 by doing 3 jumps of 5 or 3×5 .