




Worksheets to print out from [sofatutor.com](https://www.sofatutor.com)

# Measuring in Inches



- 1 Highlight the objects.
- 2 How can we write inches?
- 3 Measure the sandwich.
- 4 Highlight the correct placement for measuring on an inch ruler.
- 5 Find the length in inches.
- 6 Use an inch ruler to find the length.
- + with many hints, answer keys, and solution approaches for all tasks




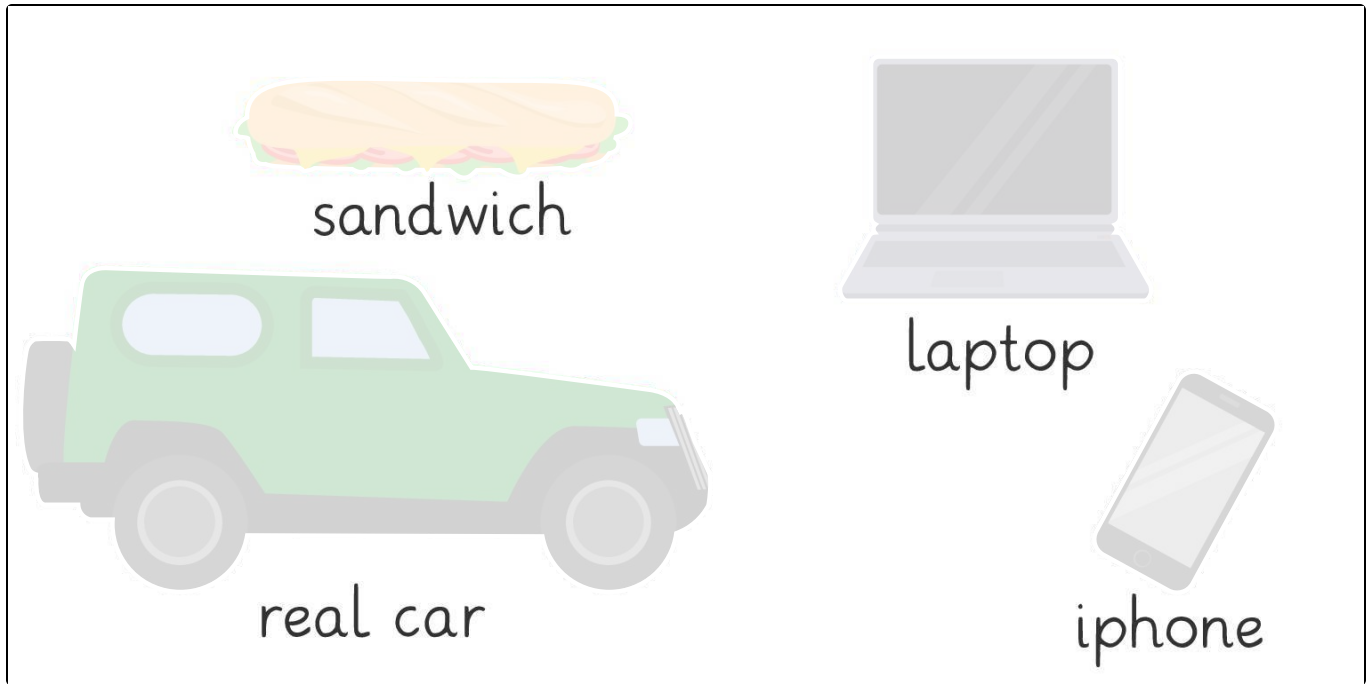
The complete package, including all tasks, hints, solutions, and solution approaches, is available to all subscribers of [sofatutor.com](https://www.sofatutor.com)



## Highlight the objects.

Select the objects that could be measured with an inch ruler.

 Correct



sandwich

laptop

real car

iphone



## Our hints for the tasks

1  
from 6

### Highlight the objects.

#### 1. Hint

Remember, an inch is a **small** unit of measurement.

---

#### 2. Hint

Which of these items would you use a ruler to measure?


---


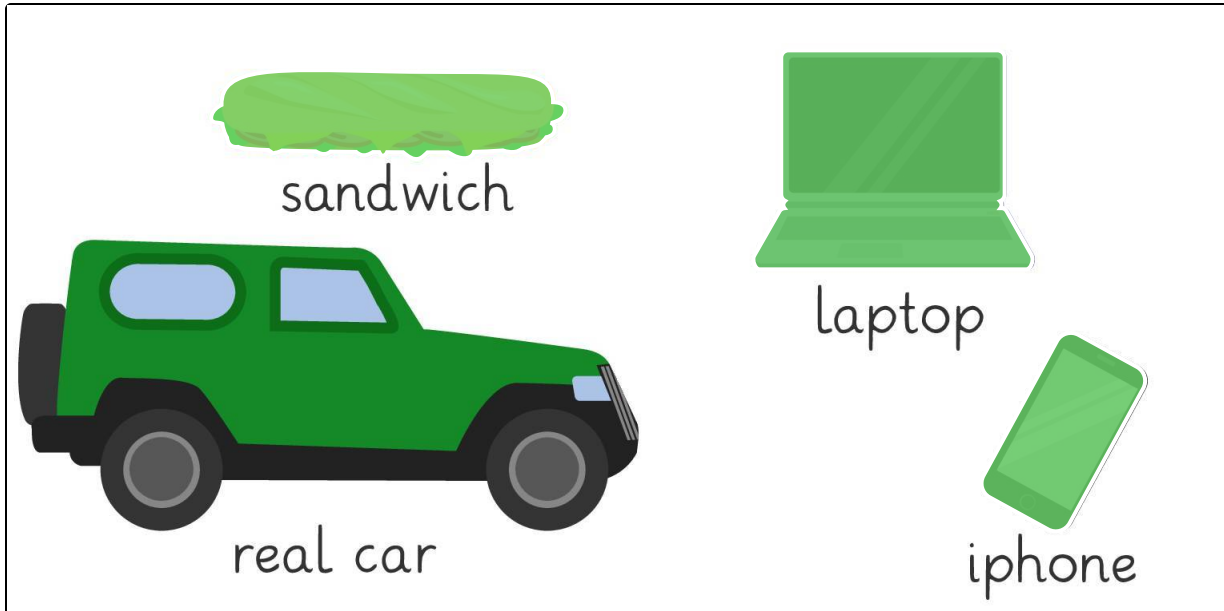


## Solutions and solution approaches for the tasks

1  
from 6

### Highlight the objects.

 Correct



**The correct answers are: the phone, the laptop and the sandwich.**

An inch is a small unit of measurement, used to measure things like phones, laptops, or food. A car is large, and it would not make sense to measure it in inches.