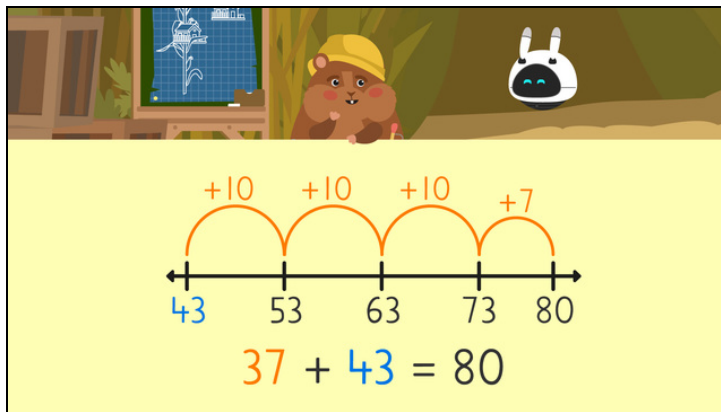




Worksheets to print out from [sofatutor.com](https://www.sofatutor.com)

Make a Number Line to Add



- 1 Solve the word problem.
- 2 What are the steps to make a number line to add?
- 3 Use the number line to find the sum.
- 4 Can you use a number line to find the sum?
- 5 Can you use a number line to find the sum?
- 6 Solve the word problem.
- + with many hints, answer keys, and solution approaches for all tasks

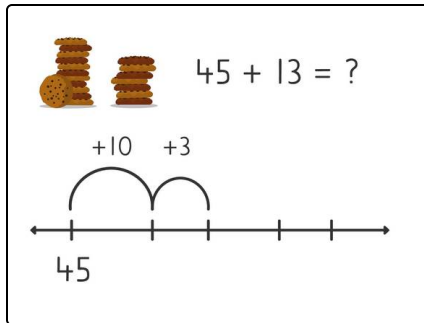


The complete package, including all tasks, hints, solutions, and solution approaches, is available to all subscribers of [sofatutor.com](https://www.sofatutor.com)



Solve the word problem.

Select the correct answer.



Mr. Squeaks has **45 cookies**. He has **13 fewer cookies** than Imani. How many cookies does Imani have?

- Imani has **58** cookies. A
- Imani has **32** cookies. B
- Imani has **52** cookies. C
- Imani has **26** cookies. D




Our hints for the tasks

1
from 6

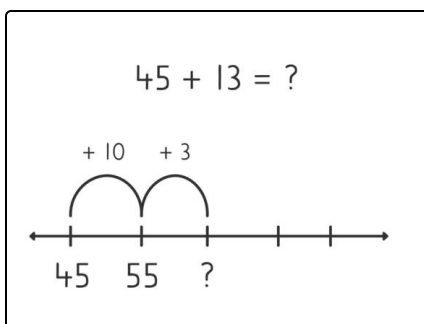
Solve the word problem.

1. Hint



If Mr. Squeaks has *fewer* cookies than Imani, that means that Imani has *more* cookies than Mr. Squeaks, so we need to add these numbers.

2. Hint



Remember to add all of the cookies. 10 have already been added, how many more need to be added to find the sum?

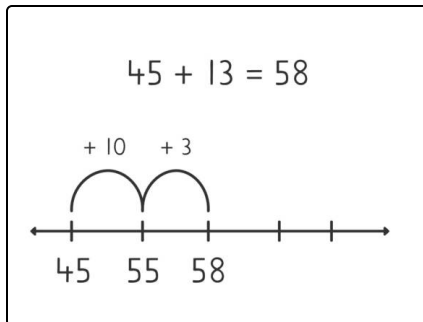


Solutions and solution approaches for the tasks

1
from 6

Solve the word problem.

Answer key: A



First, we identify our larger addend, 45 cookies. Then we skip count by 10 to add the 13 more cookies Imani has. This leads us to 55 cookies. We need to add 3 more. Imani has **58 cookies** in total.