

Worksheets to print out from [sofatutor.com](https://www.sofatutor.com)

Analog Clock: Hour and Minute Hand



- 1 Which way do the hands move around the clock?
- 2 Label the Parts of the Clock.
- 3 Which number is each hand pointing to?
- 4 Features of the analog clock.
- 5 Moving around the clock.
- 6 Help Zuri and Freddie read the clock.
- + with many hints, answer keys, and solution approaches for all tasks



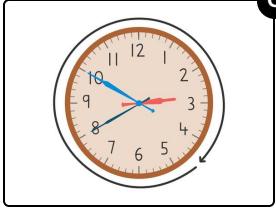
The complete package, including all tasks, hints, solutions, and solution approaches, is available to all subscribers of [sofatutor.com](https://www.sofatutor.com)

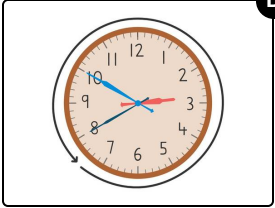
Which way do the hands move around the clock?

Choose **all** the correct answers.

A clockwise

B counter-clockwise

C 

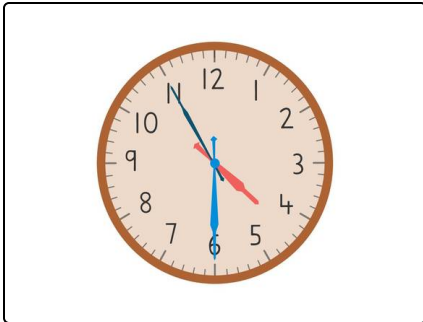
D 

Our hints for the tasks

1
from 6

Which way do the hands move around the clock?

1. Hint



Imagine which way the hands move around the clock.

2. Hint

The hands move around the clock to the right.

3. Hint

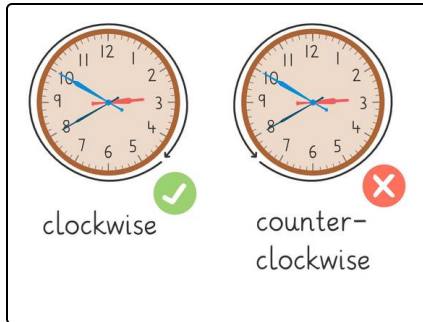
Two answers are correct.

Solutions and solution approaches for the tasks

1
from 6

Which way do the hands move around the clock?

Answer key: A, C



The hands move around the clock in a **clockwise** direction to the right.