

Worksheets to print out from [sofatutor.com](https://www.sofatutor.com)

What is Elapsed Time?




- 1 Finding the elapsed time.
- 2 Solving the elapsed time.
- 3 Arrival time of flights.
- 4 How long was the train ride?
- 5 How long does each TV show last?
- 6 The soccer game.
- + with many hints, answer keys, and solution approaches for all tasks



The complete package, including all tasks, hints, solutions, and solution approaches, is available to all subscribers of [sofatutor.com](https://www.sofatutor.com)

Finding the elapsed time.

Order the steps to find the elapsed time.



Zuri and Freddie need a reminder of how to find elapsed time when given a start and end time. Help them by putting these steps into the correct order.

A
Then count forward in minutes.

B
Count up the total time you skip counted.

C
Put the start time on the left side of the number line and the end time on the right side of the number line.

D
Start by counting forward in hours.

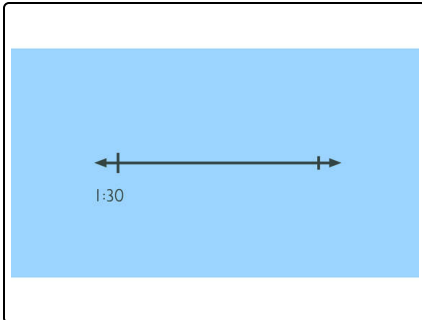
CORRECT ORDER

Our hints for the tasks

1
from 6

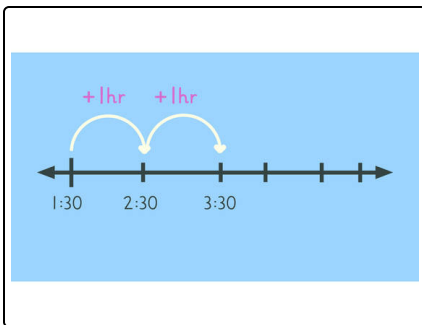
Finding the elapsed time.

1. Hint



Remember that the first thing we do, is to put the start time on the left side of the number line.

2. Hint



Remember to start your jumps in hours.

Solutions and solution approaches for the tasks

1
from 6

Finding the elapsed time.

Answer key: C, D, A, B



Put the start time on the left side of the number line and the end time on the right side of the number line.

Start by counting forward in hours.

Then count forward in minutes.

Count up the total time you skip counted.