

Worksheets to print out from [sofatutor.com](https://www.sofatutor.com)

# Comparing Scaled Bar Graphs and Picture Graphs



- 1 What are these charts called?
- 2 Can you match the terms with their definitions?
- 3 How many people preferred apples?
- 4 Use the scaled bar chart to complete the sentences.
- 5 Use the pictogram to complete the sentences.
- + with many hints, answer keys, and solution approaches for all tasks



The complete package, including all tasks, hints, solutions, and solution approaches, is available to all subscribers of [sofatutor.com](https://www.sofatutor.com)

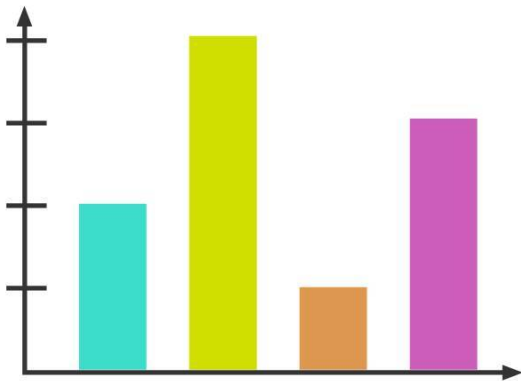
## What are these charts called?

Fill in the gaps correctly.

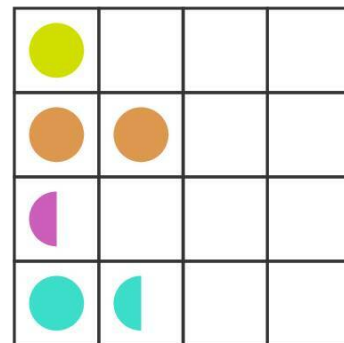
pictogram.

scaled bar chart.

This is a



This is a



## Our hints for the tasks

1  
from 5

### What are these charts called?

#### 1. Hint

**Scaled bar charts** have bars that represent the data.

---

#### 2. Hint

**Pictograms** use small pictures to represent the data.

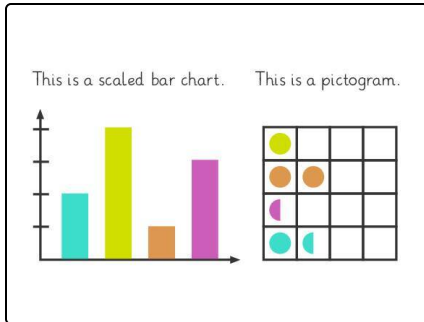
---

## Solutions and solution approaches for the tasks

1  
from 5

### What are these charts called?

**Answer key:** 1: scaled bar chart. // 2: pictogram.



On the left is a **scaled bar chart** which shows data in long bars that represent the number of times a response was recorded.

On the right is a **pictogram** which uses pictures to represent the information from a data set.