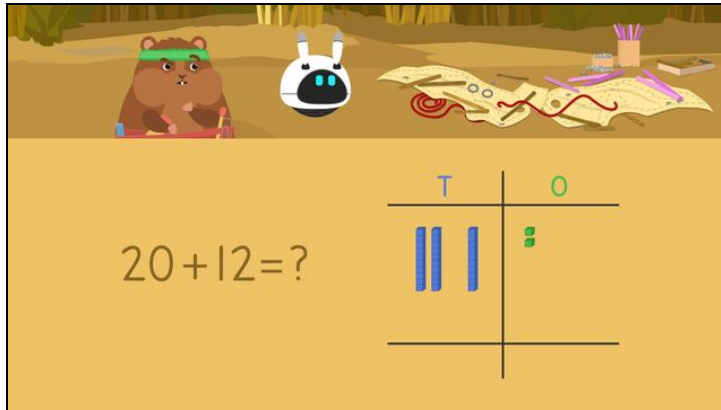


Worksheets to print out from [sofatutor.com](https://www.sofatutor.com)

Using Place Value to Add Two Digit Numbers (No Regrouping)



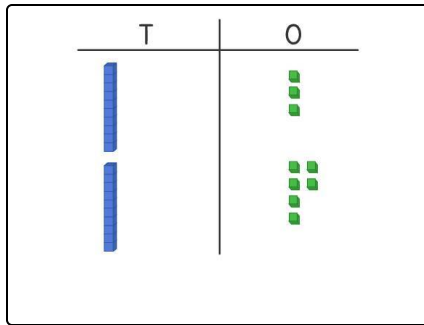
- 1 How many parts does Imani have?
- 2 How can we use place value to add two two digit numbers?
- 3 How many buttons does Mr Squeaks have?
- 4 How many metres has Mr Squeaks flown?
- 5 Solve the addition problems using place value.
- 6 Can you solve the problems?
- + with many hints, answer keys, and solution approaches for all tasks



The complete package, including all tasks, hints, solutions, and solution approaches, is available to all subscribers of [sofatutor.com](https://www.sofatutor.com)

How many parts does Imani have?

Select the correct answer.



Imani has one box of **13** spare parts and one box of **16** spare parts. How many spare parts is that altogether?

A

B

C

D

Our hints for the tasks

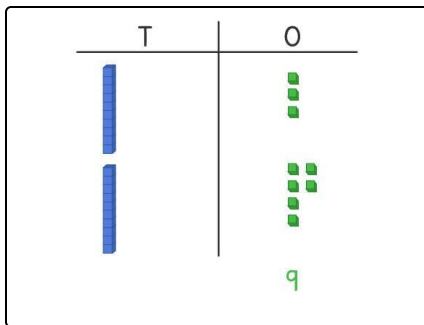
1
from 6

How many parts does Imani have?

1. Hint

Both of the numbers have been represented in the table. Now we need to add the ones.

2. Hint



Next, we need to add the tens.

3. Hint

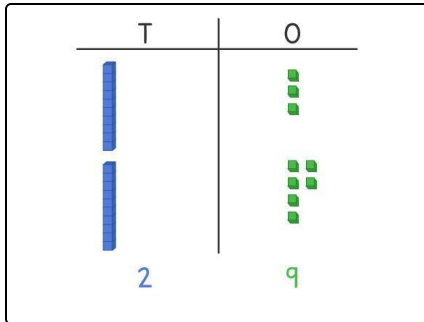
How many spare parts **altogether**?

Solutions and solution approaches for the tasks

1
from 6

How many parts does Imani have?

Answer key: C



$$13 + 16 = 29$$

- Add the ones blocks, $3 + 6 = 9$
- Add the tens rods, $1 + 1 = 2$
- Altogether that is **29** spare parts.